

# What Time Is It?



# What Time Is It?



# What Time Is It 1 Hour Later?



# What Time Is It 1 Hour Later?



# What Time Is It 2 Hours Later?



# What Time Is It 2 Hours Later?





# What Time Is It 1 Hour Earlier?



# What Time Is It 1 Hour Earlier?





# What Time Is It 2 Hours Earlier?



# What Time Is It 2 Hours Earlier?



# What Time Is It?



half past one



half past five



half past seven



half past three



half past twelve



half past nine



half past two



half past four



half past eleven

# What Time Is It?



half past eight



half past one



half past four



half past nine



half past ten



half past two



half past five



half past twelve



half past six

# What Time Is It?



4:30



9:30



7:30



12:30



5:30




11:30



2:30



8:30



1:30



# What Time Is It?



2:30



4:30



8:30



5:30



6:30



7:30



4:30



12:30



10:30



# What Time Is It?



# What Time Is It?



# What Time Is 1 Hour Later?



# What Time Is 1 Hour Later?



# What Time Is 2 Hours Later?



# What Time Is 2 Hours Later?





# What Time Is 1 Hour Earlier?



# What Time Is 1 Hour Earlier?



# What Time Is 2 Hours Earlier?



# What Time Is 2 Hours Earlier?



# What Time Is It?



7:30



4:30



12:30



9:30



1:30



5:30



11:30



6:30



8:30

# What Time Is It?



2:30



6:30



1:30



4:30



3:30



9:30



12:30



10:30



8:30



# What Time Is It?



half past seven



half past four



half past twelve



half past nine



half past one



half past five



half past eleven



half past six



half past eight

# What Time Is It?



half past two



half past six



half past one



half past four



half past three



half past nine



half past twelve



half past ten



half past eight

# What Time Is It?



# What Time Is It?



# What Time Is It 1 Hour Later?



# What Time Is It 1 Hour Later?





# What Time Is It 2 Hours Later?



# What Time Is It 2 Hours Later?



# What Time Is It 1 Hour Earlier?



# What Time Is It 1 Hour Earlier?



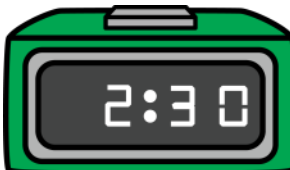

# What Time Is It 2 Hours Earlier?



# What Time Is It 2 Hours Earlier?


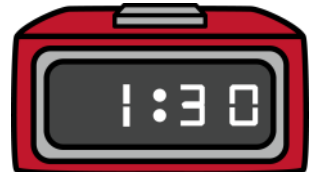


# What Time Is It?

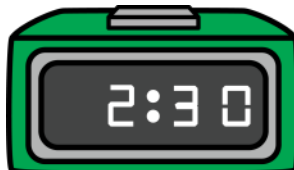





# What Time Is It?



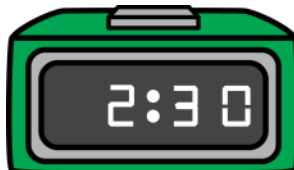
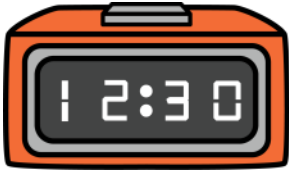
# What Time Is It 1 Hour Later?




# What Time Is It 1 Hour Later?



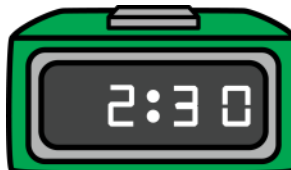
# What Time Is It 2 Hours Later?



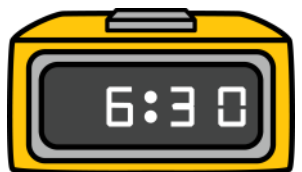
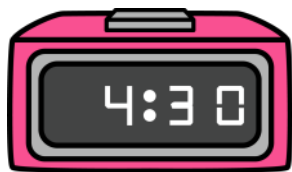
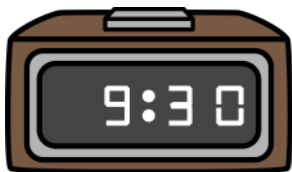
What Time Is It 2 Hours Later?



# What Time Is It 1 Hour Earlier?

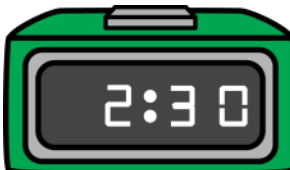


# What Time Is It 1 Hour Earlier?

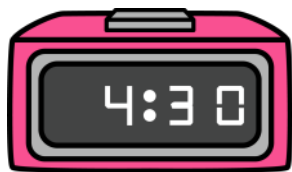





What Time Is It 2 Hours Earlier?



What Time Is It 2 Hours Earlier?



# What Time Is It?



# What Time Is It?



# What Time Is It 1 Hour Later?



# What Time Is It 1 Hour Later?



# What Time Is It 2 Hours Later?





# What Time Is It 2 Hours Later?



# What Time Is It 1 Hour Earlier?



# What Time Is It 1 Hour Earlier?











# What Time Is It 2 Hours Earlier?












# What Time Is It 2 Hours Earlier?



# What Time Is It?












# What Time Is It?






















# What Time Is It 1 Hour Later?











# What Time Is It 1 Hour Later?












# What Time Is It 2 Hours Later?










# What Time Is It 2 Hours Later?












# What Time Is It 1 Hour Earlier?











# What Time Is It 1 Hour Earlier?



What Time Is It 2 Hours Earlier?




What Time Is It 2 Hours Earlier?







# What Time Is It?




half past five




half past eleven




half past nine




half past two




half past six




half past one



half past ten




half past four




half past twelve


# What Time Is It?




half past twelve




half past nine




half past five




half past two




half past eight




half past four



half past ten




half past six




half past three


# What Time Is It?




1:30




8:30




12:30




9:30




2:30




5:30



3:30




7:30




10:30


# What Time Is It?




4:30




2:30




5:30




8:30




6:30




9:30



7:30



3:30



11:30

# What Time Is It?



# What Time Is It?



# What Time Is It 1 Hour Later?



# What Time Is It 1 Hour Later?





# What Time Is It 2 Hours Later?



# What Time Is It 2 Hours Later?



# What Time Is It 1 Hour Earlier?



# What Time Is It 1 Hour Earlier?



# What Time Is It 2 Hours Earlier?



# What Time Is It 2 Hours Earlier?



# What Time Is It?



half past one



half past five



half past seven



half past three



half past twelve



half past nine



half past two



half past four



half past eleven

# What Time Is It?



half past eight



half past one



half past four



half past nine



half past ten



half past two



half past five



half past twelve



half past six



# What Time Is It?



4:30



9:30



7:30



12:30



5:30



11:30



2:30



8:30



1:30

# What Time Is It?



2:30



4:30



8:30



5:30



6:30



7:30



4:30



12:30



10:30

# What Time Is It?



# What Time Is It?



# What Time Is 1 Hour Later?



# What Time Is 1 Hour Later?



# What Time Is 2 Hours Later?



# What Time Is 2 Hours Later?





# What Time Is 1 Hour Earlier?



# What Time Is 1 Hour Earlier?



# What Time Is 2 Hours Earlier?



# What Time Is 2 Hours Earlier?



# What Time Is It?



7:30



4:30



12:30



9:30



1:30



5:30



11:30



6:30



8:30

# What Time Is It?



2:30



6:30



1:30



4:30



3:30



9:30



12:30



10:30



8:30

# What Time Is It?



half past seven



half past four



half past twelve



half past nine



half past one



half past five



half past eleven



half past six



half past eight

# What Time Is It?



half past two



half past six



half past one



half past four



half past three



half past nine



half past twelve



half past ten



half past eight



# What Time Is It?



# What Time Is It?



# What Time Is It 1 Hour Later?



# What Time Is It 1 Hour Later?



# What Time Is It 2 Hours Later?



# What Time Is It 2 Hours Later?



# What Time Is It 1 Hour Earlier?



# What Time Is It 1 Hour Earlier?






# What Time Is It 2 Hours Earlier?




# What Time Is It 2 Hours Earlier?



# What Time Is It?



half past three



half past nine



half past five



half past eight




half past two



half past eleven



half past seven




half past twelve




half past six

# What Time Is It?



half past one



half past three



half past eight




half past eleven




half past four



half past two



half past five



half past seven



half past ten

# What Time Is It?



# What Time Is It?



# What Time Is It 1 Hour Later?



# What Time Is It 1 Hour Later?





# What Time Is It 2 Hours Later?



# What Time Is It 2 Hours Later?



# What Time Is It 1 Hour Earlier?



# What Time Is It 1 Hour Earlier?



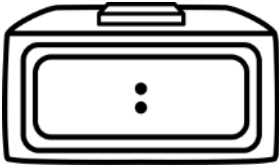
# What Time Is It 2 Hours Earlier?



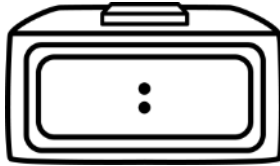
# What Time Is It 2 Hours Earlier?



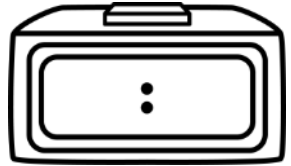
# What Time Is It?



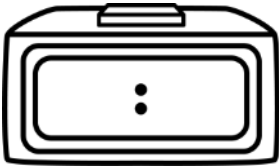
half past two



half past nine



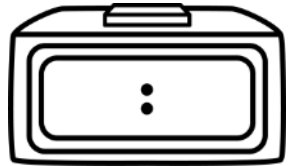
half past twelve



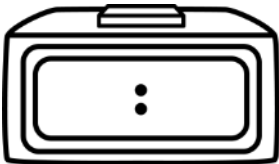
half past three



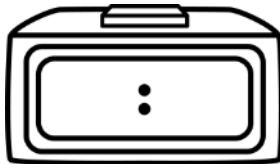
half past seven



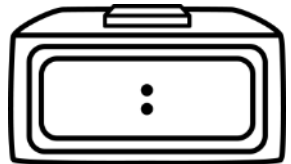
half past ten



half past one

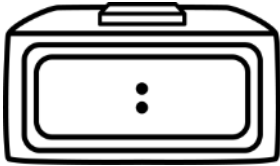


half past eleven

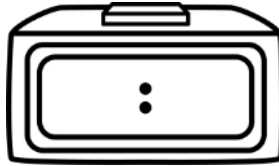


half past four

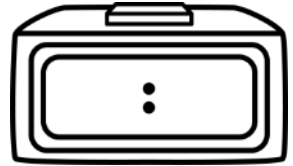
# What Time Is It?



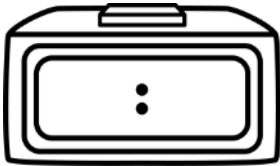
half past five



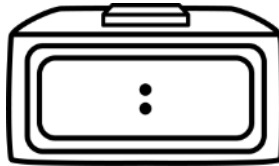
half past twelve



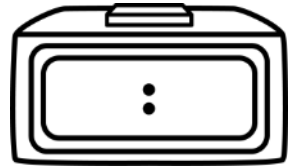
half past four



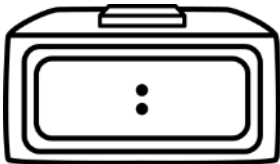
half past nine



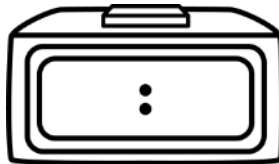
half past six



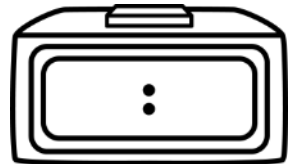
half past seven



half past one



half past three



half past eight



# What Time Is It?



# What Time Is It?



# What Time Is It 1 Hour Later?



# What Time Is It 1 Hour Later?



# What Time Is It 2 Hours Later?



# What Time Is It 2 Hours Later?



# What Time Is It 1 Hour Earlier?



# What Time Is It 1 Hour Earlier?





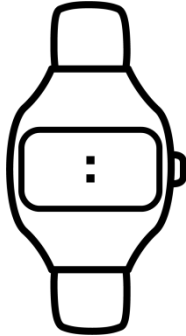
# What Time Is It 2 Hours Earlier?



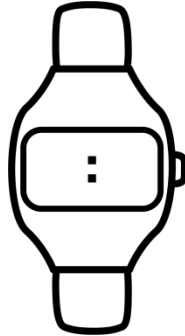
# What Time Is It 2 Hours Earlier?



# What Time Is It?



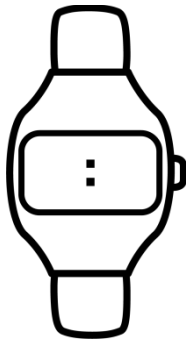
half past two



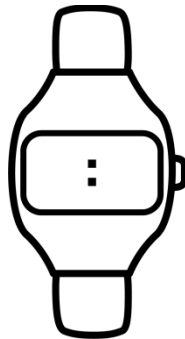
half past nine



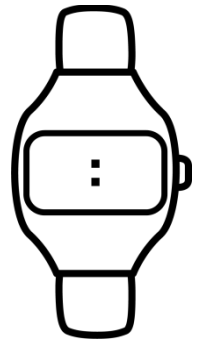
half past twelve



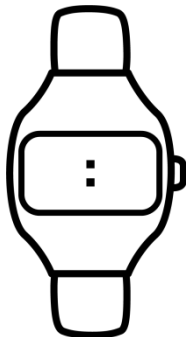
half past three



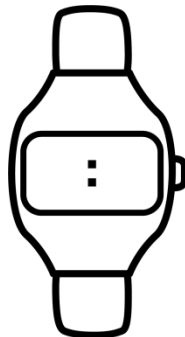
half past seven



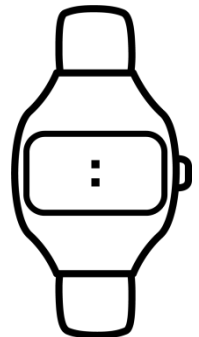
half past ten



half past one

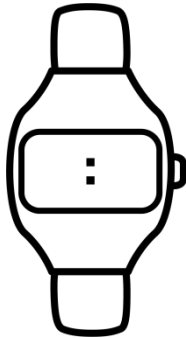


half past eleven

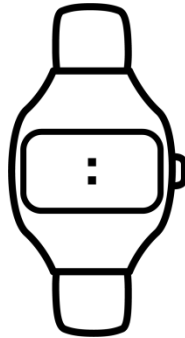


half past four

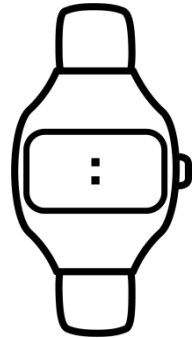
# What Time Is It?



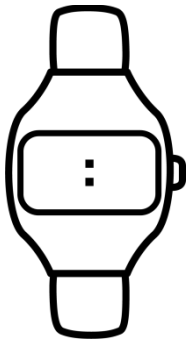
half past five



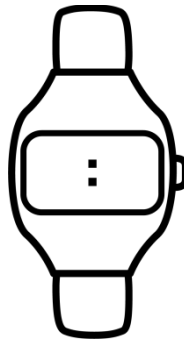
half past twelve



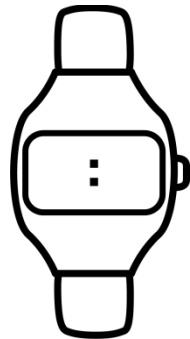
half past four



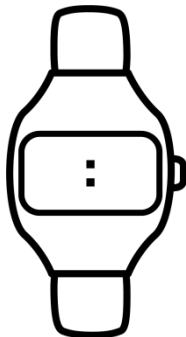
half past nine



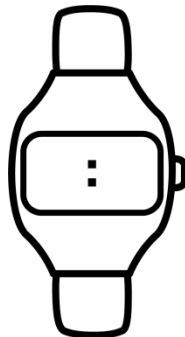
half past six



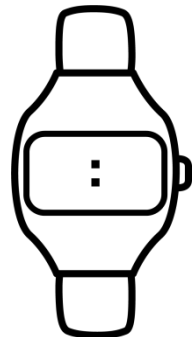
half past seven



half past one



half past three



half past eight