










Train Timetable #1

	Red Train	Blue Train	Yellow Train
			
Station 1	8:00am	10:00am	12:00pm
Station 2	9:00am	11:00am	1:00pm
Station 3	10:00am	12:00pm	2:00pm
Station 4	11:00am	1:00pm	3:00pm
Station 5	12:00pm	2:00pm	4:00pm
Station 6	1:00pm	3:00pm	5:00pm




Train Timetable #2

	Red Train	Blue Train	Yellow Train
			
Station 1	7:30am	10:00am	1:30pm
Station 2	8:00am	10:30am	2:00pm
Station 3	8:30am	11:00am	2:30pm
Station 4	9:00am	11:30am	3:00pm
Station 5	9:30am	12:00pm	3:30pm
Station 6	10:00am	12:30pm	4:00pm

Train Timetable #3

	Red Train	Blue Train	Yellow Train
			
Station 1	8:00am	10:00am	1:30pm
Station 2	9:00am		2:30pm
Station 3		12:30pm	4:00pm
Station 4	11:30am	1:30pm	4:30pm
Station 5	1:00pm	2:00pm	
Station 6	1:30pm	3:30pm	6:00pm

Train Timetable #4

	Red Train	Blue Train	Yellow Train
			
Station 1	9:15am	11:30am	2:30pm
Station 2	10:00am	12:15pm	
Station 3		1:00pm	4:15pm
Station 4		2:15pm	5:00pm
Station 5	12:15pm		5:30pm
Station 6	1:30pm	4:00pm	6:15pm

Train Timetable #1

1.	At what time does the Blue Train leave the first station?	
2.	At what time does the Yellow Train arrive at the last station?	
3.	At what time does the Red Train arrive at Station 4?	
4.	At what time does the Yellow Train arrive at Station 2?	
5.	At what time does the Blue Train arrive at Station 3?	
6.	At what time does the Red Train arrive at the last station?	
7.	How long does it take the Yellow Train to get from Station 2 to Station 3?	
8.	How long does it take the Blue Train to get from Station 3 to Station 4?	
9.	How long does it take the Red Train to get from Station 2 to Station 4?	
10.	How long does it take the Yellow Train to get from Station 1 to Station 5?	

Train Timetable #2

1.	At what time does the Blue Train leave the first station?	
2.	At what time does the Yellow Train arrive at the last station?	
3.	At what time does the Red Train arrive at Station 4?	
4.	At what time does the Yellow Train arrive at Station 2?	
5.	At what time does the Blue Train arrive at Station 3?	
6.	At what time does the Red Train arrive at the last station?	
7.	How long does it take the Yellow Train to get from Station 2 to Station 3?	
8.	How long does it take the Blue Train to get from Station 3 to Station 5?	
9.	How long does it take the Red Train to get from Station 2 to Station 5?	
10.	How long does it take the Yellow Train to get from Station 1 to Station 5?	

Train Timetable #3

1.	At what time does the Yellow Train leave the first station?	
2.	At what time does the Red Train arrive at the last station?	
3.	At what time does the Blue Train arrive at Station 4?	
4.	Which train does not stop at Station 5?	
5.	Which train does not stop at Station 3?	
6.	Which train does not stop at Station 2?	
7.	How long does it take the Yellow Train to get from Station 2 to Station 4?	
8.	How long does it take the Blue Train to get from Station 3 to Station 5?	
9.	How long does it take the Red Train to get from Station 2 to Station 5?	
10.	What is the time difference between when the Red Train leaves Station 1 and when the Yellow train leaves Station 1?	

Train Timetable #4

1.	At what time does the Yellow Train leave the first station?	
2.	At what time does the Red Train arrive at the last station?	
3.	At what time does the Blue Train arrive at Station 4?	
4.	Which train does not stop at Station 2?	
5.	Which train does not stop at Station 5?	
6.	Which train does not stop at two stations?	
7.	How long does it take the Yellow Train to get from Station 3 to Station 5?	
8.	How long does it take the Blue Train to get from Station 1 to Station 3?	
9.	How long does it take the Red Train to get from Station 2 to Station 6?	
10.	What is the time difference between when the Red Train arrives at Station 6 and when the Yellow Train arrives at leaves Station 6?	